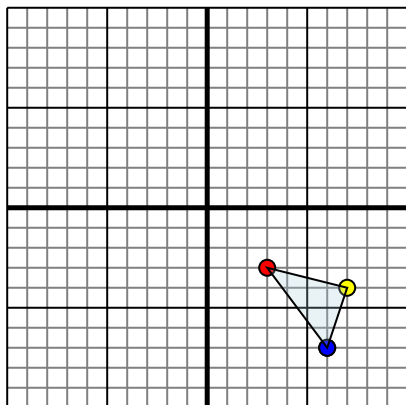




Reflect each shape as described.

1)

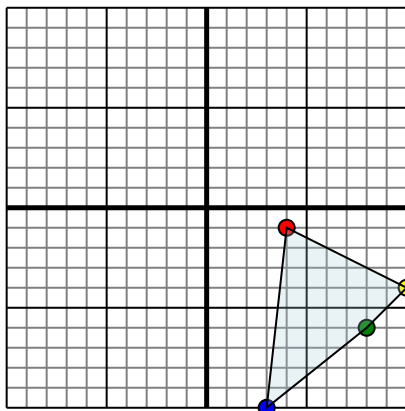


The shape above has the following coordinates:

- A. (3,-3)
- B. (7,-4)
- C. (6,-7)

Reflect the shape over the X axis.

2)

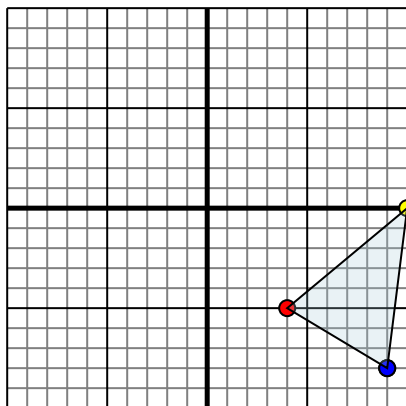


The shape above has the following coordinates:

- A. (4,-1)
- B. (10,-4)
- C. (8,-6)
- D. (3,-10)

Reflect the shape over the X axis.

3)

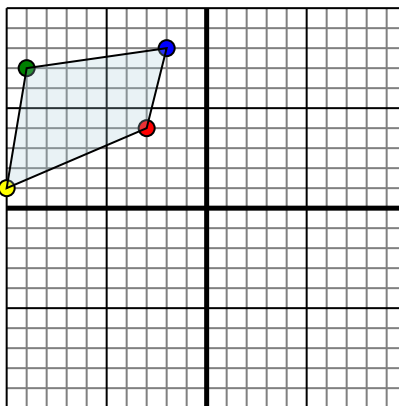


The shape above has the following coordinates:

- A. (4,-5)
- B. (10,0)
- C. (9,-8)

Reflect the shape over the Y axis.

4)



The shape above has the following coordinates:

- A. (-3,4)
- B. (-10,1)
- C. (-9,7)
- D. (-2,8)

Reflect the shape over the X axis.

Answers

1a. \_\_\_\_\_

1b. \_\_\_\_\_

1c. \_\_\_\_\_

1d. \_\_\_\_\_

2a. \_\_\_\_\_

2b. \_\_\_\_\_

2c. \_\_\_\_\_

2d. \_\_\_\_\_

2e. \_\_\_\_\_

3a. \_\_\_\_\_

3b. \_\_\_\_\_

3c. \_\_\_\_\_

3d. \_\_\_\_\_

4a. \_\_\_\_\_

4b. \_\_\_\_\_

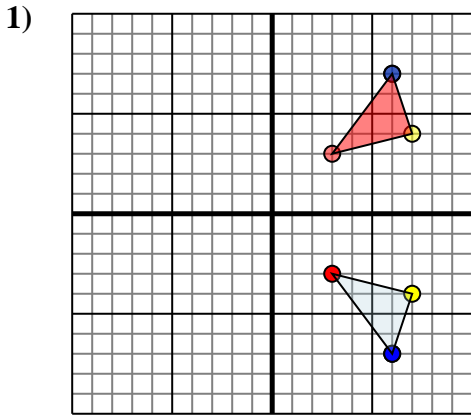
4c. \_\_\_\_\_

4d. \_\_\_\_\_

4e. \_\_\_\_\_



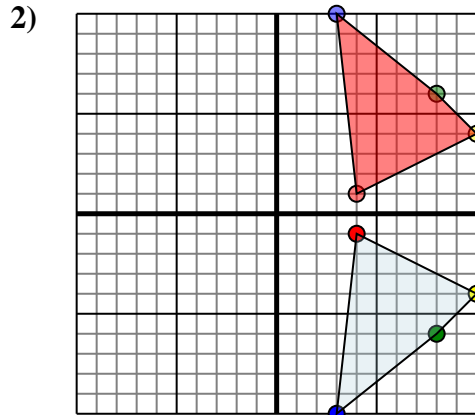
Reflect each shape as described.



The shape above has the following coordinates:

- A. (3,-3)
- B. (7,-4)
- C. (6,-7)

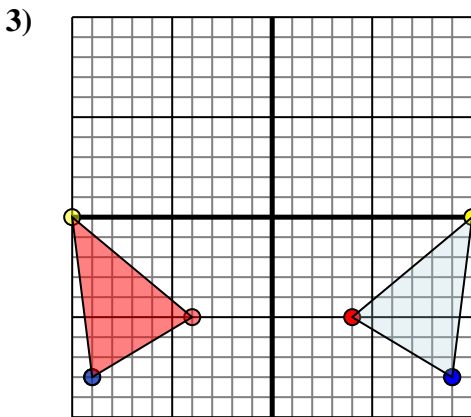
Reflect the shape over the X axis.



The shape above has the following coordinates:

- A. (4,-1)
- B. (10,-4)
- C. (8,-6)
- D. (3,-10)

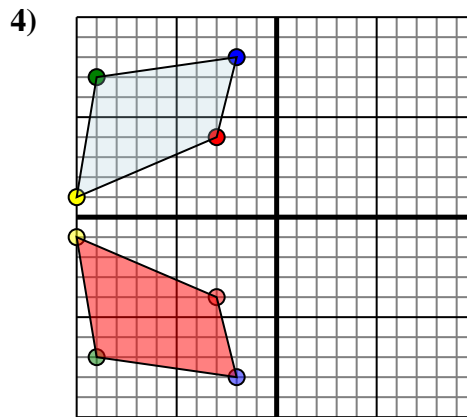
Reflect the shape over the X axis.



The shape above has the following coordinates:

- A. (4,-5)
- B. (10,0)
- C. (9,-8)

Reflect the shape over the Y axis.



The shape above has the following coordinates:

- A. (-3,4)
- B. (-10,1)
- C. (-9,7)
- D. (-2,8)

Reflect the shape over the X axis.

Answers

1a. **3,3**

1b. **7,4**

1c. **6,7**

1d. **Graph**

2a. **4,1**

2b. **10,4**

2c. **8,6**

2d. **3,10**

2e. **Graph**

3a. **-4,-5**

3b. **-10,0**

3c. **-9,-8**

3d. **Graph**

4a. **-3,-4**

4b. **-10,-1**

4c. **-9,-7**

4d. **-2,-8**

4e. **Graph**